

Pencil and Paper Task

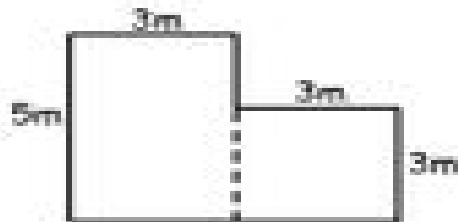
Name: \_\_\_\_\_

Area



Print

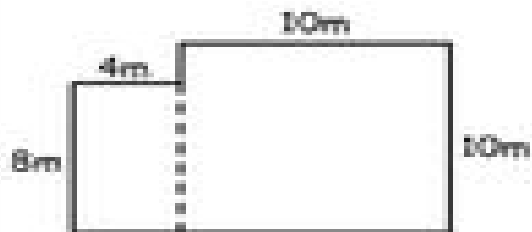
Calculate the total area of these irregular shapes.



A 1 = \_\_\_\_\_ x \_\_\_\_\_

A 2 = \_\_\_\_\_ x \_\_\_\_\_

Total Area = \_\_\_\_\_

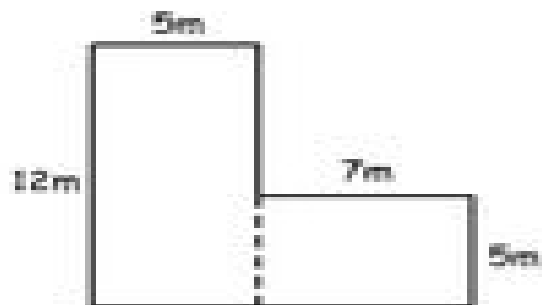


A 1 = \_\_\_\_\_ x \_\_\_\_\_

A 2 = \_\_\_\_\_ x \_\_\_\_\_

Total Area = \_\_\_\_\_

How many square metres of carpet are laid in this house?



A 1 = \_\_\_\_\_ x \_\_\_\_\_

A 2 = \_\_\_\_\_ x \_\_\_\_\_

Total Area = \_\_\_\_\_