




name: _____

1-2-3-4-5-6-7-8-9-10-11-12-13-14-15-16-17-18-19-20

19



19 19 19 19

Write to 20

Circle the number that is greater

4 7	2 16	18 14	3 13
-----	------	-------	------

I can draw 19: _____

Tally Marks