










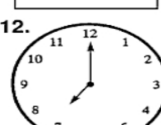


Name: _____

Telling Time Practice

Directions: Write the time on each clock in the box below.

1. 	2. 	3. 	4. 
<input type="text"/>	<input type="text"/>	<input type="text"/>	<input type="text"/>
5. 	6. 	7. 	8. 
<input type="text"/>	<input type="text"/>	<input type="text"/>	<input type="text"/>
9. 	10. 	11. 	12. 
<input type="text"/>	<input type="text"/>	<input type="text"/>	<input type="text"/>