




Name: _____


Can you tell the time to the nearest 5 minutes?
Worksheet 2

1.



1:55

2.




1:55

3.



2:35

4.




5.



5:05

6.




5:00

7.



8.



5:55

9.



10.



5:15

11.

