

School  
Topic  
Date

**Mathematics**  
**WORKSHEET**  
**Circumference of**  
**Three Quadrants**

Worksheet:  1  2  3  4  5  6  7  8  9  10

Name: \_\_\_\_\_

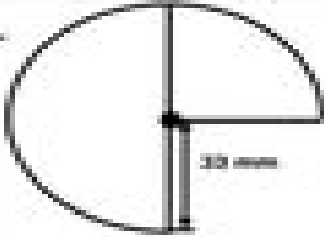
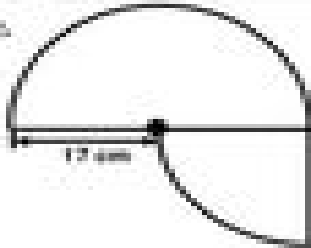
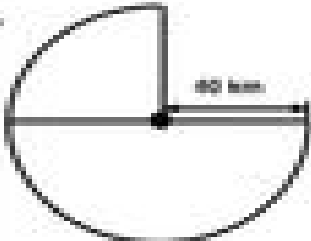
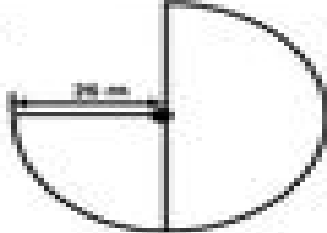
Student No.: \_\_\_\_\_

Date: \_\_\_\_\_

Year 6/ \_\_\_\_\_

**C I R C L E S**

Find the circumference of each figure. (Take  $\pi = 3.14$ )

<p>1.</p> 	<p>2.</p> 
<p>3.</p> 	<p>4.</p> 

Area: \_\_\_\_\_