

Name _____

ASSESSMENT 3

Date _____

LESSON 20

Math 2

1. John has 8 pennies. Susan gave him 2 pennies. How many pennies does John have now?

What type of story is this?

Circle one: some, some more some, some went away

Four children were playing. One child went home. How many children are playing now?

What type of story is this?

Circle one: some, some more some, some went away

2. Finish the repeating pattern.



3. Write these numbers using digits.

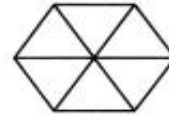
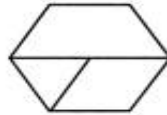
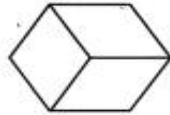
fourteen _____

thirty-five _____

sixty-one _____

seventy _____

4. Circle the shapes that have equal size pieces.



5. What is one more than 49? _____

What is one less than 20? _____

6. Add.

$6 + 1 =$ _____ $5 + 0 =$ _____ $8 + 8 =$ _____ $0 + 7 =$ _____

$7 + 7 =$ _____ $1 + 8 =$ _____ $3 + 3 =$ _____ $9 + 9 =$ _____