

Name: \_\_\_\_\_

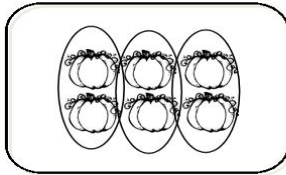
CCSS 2.OA.4 Use addition to find the total number of objects arranged in rectangular arrays with up to 5 rows and up to 5 columns...

## Repeated Addition Arrays


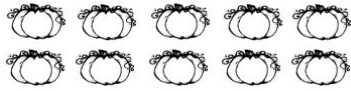


**Directions:** Write an equation to solve the problems.

Use repeated addition to write an equation to show how many pumpkins are in each patch. Circle columns of pumpkins.

Example:



$$2 + 2 + 2 = 6$$

1.  _____	2.  _____
3.  _____	4.  _____

\_\_\_\_ I double checked my work.

Graphics/fonts copyright DJ Inkers. [www.djinkers.com](http://www.djinkers.com)