

Phases of the Moon - Matching

Write in the correct name for each phase of the moon using the names provided on the right.




1. _____

full moon



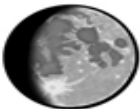
2. _____

new moon



3. _____

waxing crescent



4. _____

waning crescent




5. _____

first quarter



6. _____

last quarter



7. _____

waxing gibbous



8. _____

waning gibbous