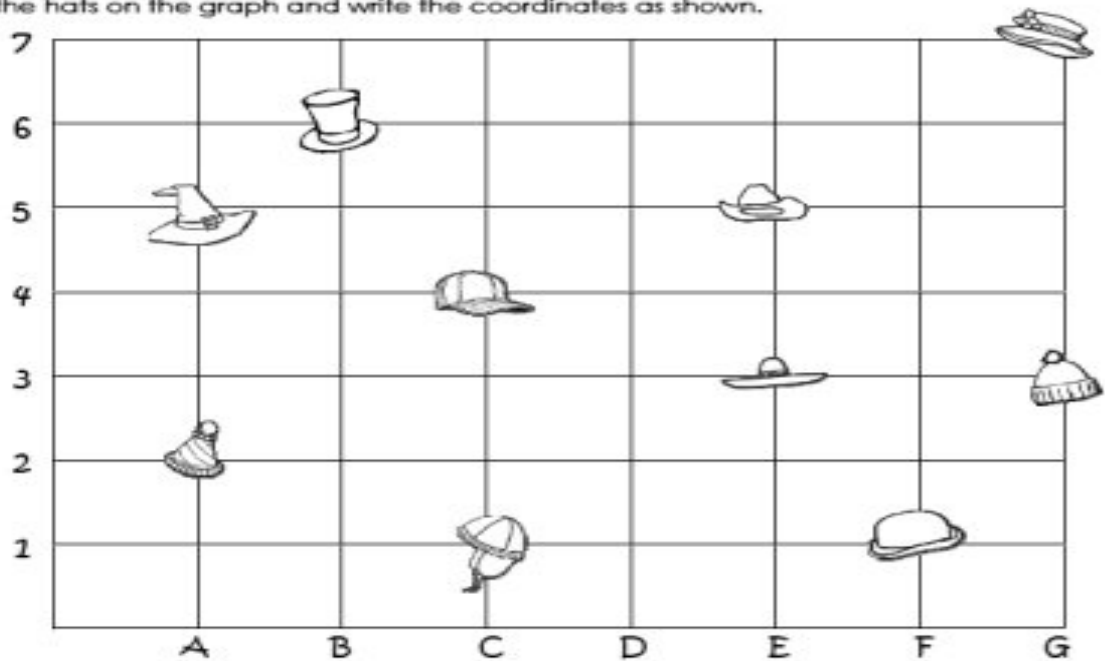



## All Kinds of Hats Graphing Fun

Find the hats on the graph and write the coordinates as shown.




1.  is at A, 2

2.  is at \_\_\_\_\_, \_\_\_\_\_


3.  is at \_\_\_\_\_, \_\_\_\_\_


4.  is at \_\_\_\_\_, \_\_\_\_\_

5.  is at \_\_\_\_\_, \_\_\_\_\_

6.  is at \_\_\_\_\_, \_\_\_\_\_

7.  is at \_\_\_\_\_, \_\_\_\_\_

8.  is at \_\_\_\_\_, \_\_\_\_\_

9.  are at \_\_\_\_\_, \_\_\_\_\_

10.  is at \_\_\_\_\_, \_\_\_\_\_