





Name \_\_\_\_\_

# Unit 1 test

Count the dots.





What comes next?



54, \_\_\_\_\_

38, \_\_\_\_\_

What is the number?



Fill in the frame.



Fill in the missing numbers.

|    |    |   |    |    |  |    |    |    |    |
|----|----|---|----|----|--|----|----|----|----|
| 1  |    | 3 | 4  |    |  | 7  |    | 9  | 10 |
|    | 12 |   | 14 |    |  | 17 |    | 19 |    |
| 21 |    |   | 24 | 25 |  |    | 28 |    | 30 |