





Name _____

Unit 1 test

Count the dots.





What comes next?


54, _____

38, _____

What is the number?



Fill in the frame.



Fill in the missing numbers.

1		3	4			7		9	10
	12		14			17		19	
21			24	25			28		30