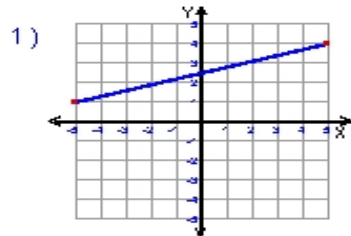


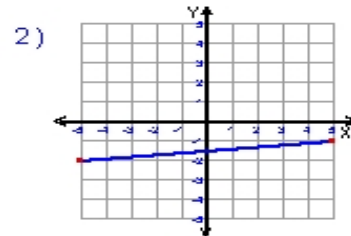
Name : \_\_\_\_\_ Score : \_\_\_\_\_

Teacher : \_\_\_\_\_ Date : \_\_\_\_\_

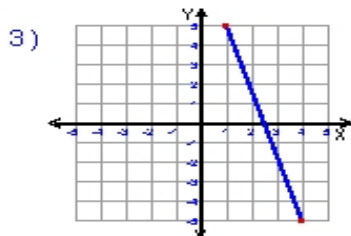
### Find the Slope of Each Line



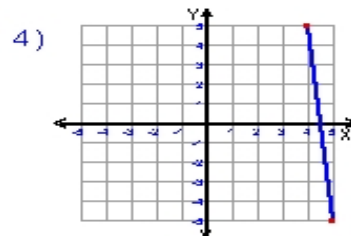
slope = \_\_\_\_\_



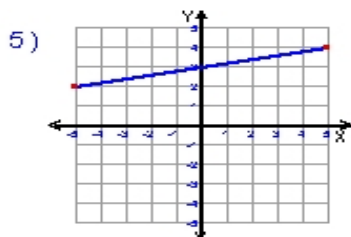
slope = \_\_\_\_\_



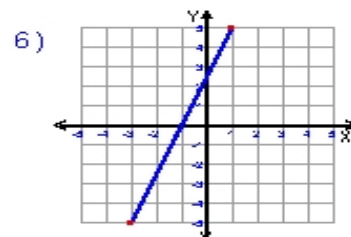
slope = \_\_\_\_\_



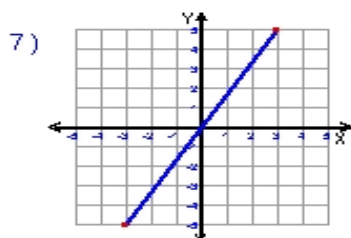
slope = \_\_\_\_\_



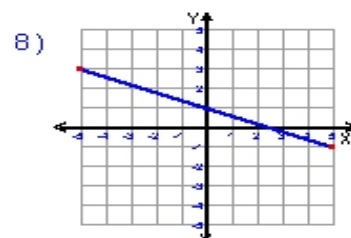
slope = \_\_\_\_\_



slope = \_\_\_\_\_



slope = \_\_\_\_\_



slope = \_\_\_\_\_

