

NAME: \_\_\_\_\_

DATE: \_\_\_\_\_

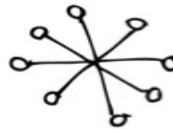
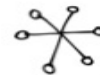

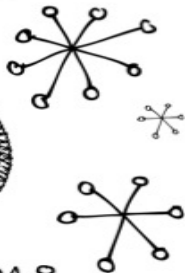



# What's the Missing Number?



Directions: Find the missing numbers for the problems.

$3+2=$ ___	$4+$ ___ $=6$	$8+$ ___ $=9$	___ $+2=5$	$6+5=$ ___
___ $+4=8$	$7+$ ___ $=9$	$6+3=$ ___	___ $+6=10$	$5+$ ___ $=6$
$8+$ ___ $=10$	$4+3=$ ___	___ $+1=6$	$6+$ ___ $=9$	___ $+3=5$
___ $+2=6$	___ $+3=7$	$5+5=$ ___	$4+$ ___ $10$	$3+3=$ ___
$8+$ ___ $=8$	___ $+4=8$	___ $+2=4$	$1+1=$ ___	$9+$ ___ $=10$



MCCL0A.7/MCCL0A.8

Faith Wheeler © 2012 All Rights Reserved