


Name Kevin

Date 1-20-14


Level 2 # 10

3043


Cliff bought 49 animal stickers. He wants to give equal amounts to 7 friends. How many stickers will each friend get?



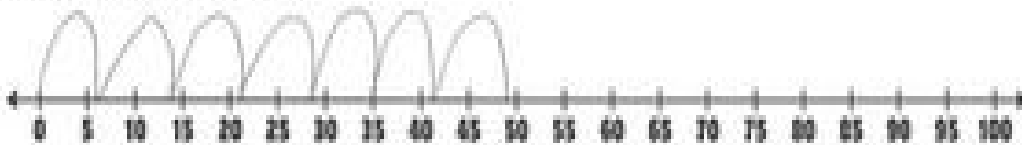
Groups of



An Array



Jumps on a number line



Equation

$$49 \div 7 = 7$$

The answer in a complete sentence

Each friend will get  
7 stickers.