




Name _____

Date _____

Daily Math Review for 4th Grade**Week 1**

Monday	<p>If you know $30 = 6 \times 5$, then 30 is 6 times as many as ____</p>	<p>Find the perimeter of the rectangle</p>  <p>_____</p>
	<p>Round to the nearest ten thousand</p> <p>24305</p> <p>_____</p>	<p>Solve</p> $\begin{array}{r} 657 \\ + 195 \\ \hline \end{array}$
Tuesday	<p>Anna read 5 books. If her brother read 3 times as many books, how many did he read?</p>	<p>Circle the name of the geometric figure</p>  <p>ray point line segment</p>
	<p>Circle each fraction that is equivalent to one half.</p> <p>$\frac{1}{4}$ $\frac{2}{4}$ $\frac{3}{4}$ $\frac{5}{10}$</p>	<p>Solve</p> $24 \times 8 = \underline{\quad}$
Wednesday	<p>Which would you prefer: one gallon of hot air or one gallon of cold air? Why? How often do you use hot air? How often do you use cold air? How often do you use hot air? How often do you use cold air?</p>	<p>Circle all shapes that contain at least one right angle</p> 
	<p>Compare using >, <, or =</p> <p>$\frac{2}{10}$ _____ $\frac{7}{10}$</p>	<p>Solve</p> $82 + 9 = \underline{\quad}$