

Name: _____

Volume Cubes

Count the cubes and write the volume of each shape.
The first one has been done for you as an example.

a.



16 cubic units

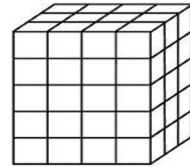
b.



c.



d.



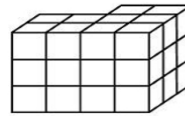
e.



f.



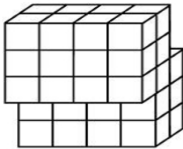
g.



h.



i.



j.



k.



l.

