




Counting back



Count back to find out on which step the frog jumps.



Write the missing numbers in the boxes.

$3 - 3 = \boxed{0}$

$20 - 10 = \boxed{}$

$9 - \boxed{} = 6$

$15 - \boxed{} = 5$

$5 - 4 = \boxed{}$

$8 - 8 = \boxed{}$

$5 - \boxed{} = 0$

$20 - \boxed{} = 4$

$15 - 4 = \boxed{}$

$19 - 9 = \boxed{}$

$6 - \boxed{} = 2$

$18 - \boxed{} = 11$

$10 - 9 = \boxed{}$

$16 - 9 = \boxed{}$

$10 - \boxed{} = 4$

$13 - \boxed{} = 10$