


Name \_\_\_\_\_


# arrays

Directions: Write how many columns and rows each array has.




\_\_\_ columns

\_\_\_ rows




\_\_\_ columns

\_\_\_ rows




\_\_\_ columns

\_\_\_ rows



\_\_\_ columns

\_\_\_ rows



\_\_\_ columns

\_\_\_ rows