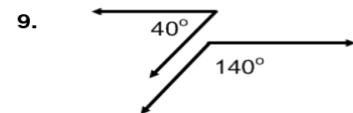
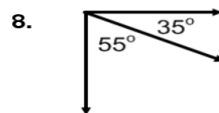
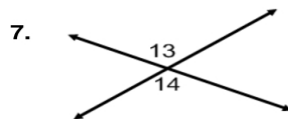
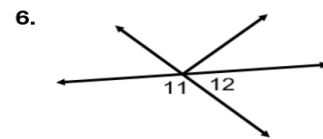
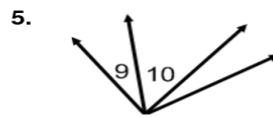
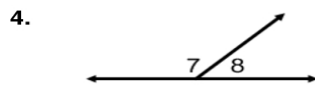
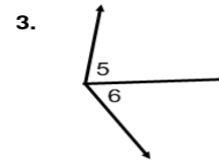
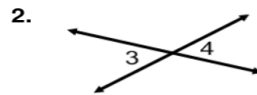
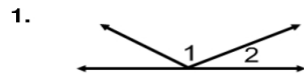


Identify each pair of angles as adjacent, vertical, complementary, supplementary, or a linear pair.



Use the figure at the right to answer each question.

10. Name two acute vertical angles.
11. Name two obtuse vertical angles.
12. Name a pair of adjacent angles
13. Name a linear pair.
14. Name a pair of complementary angles.
15. Name an angle supplementary to $\angle FGE$

