





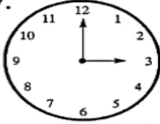







Name: _____

Telling Time Practice

Directions: Write the time on each clock in the box below.

1.  <input type="text"/>	2.  <input type="text"/>	3.  <input type="text"/>	4.  <input type="text"/>
5.  <input type="text"/>	6.  <input type="text"/>	7.  <input type="text"/>	8.  <input type="text"/>
9.  <input type="text"/>	10.  <input type="text"/>	11.  <input type="text"/>	12.  <input type="text"/>