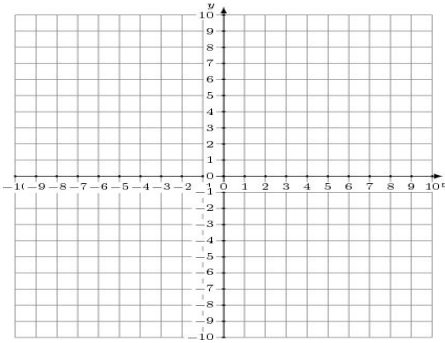


Graphing Linear Systems (J)

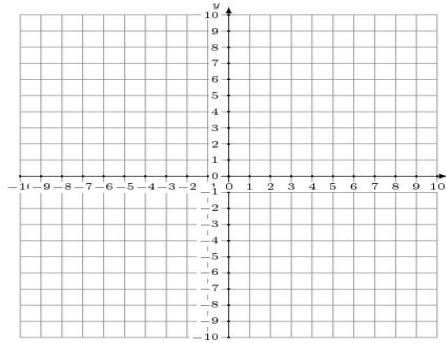
Graph each system and identify its solution.

1. $12x + 5y = 45$
 $4x + 5y = 5$



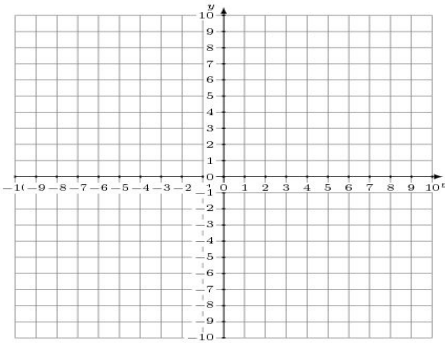
Solution: (____,____)

2. $x + 2y = -10$
 $2x - 3y = -6$



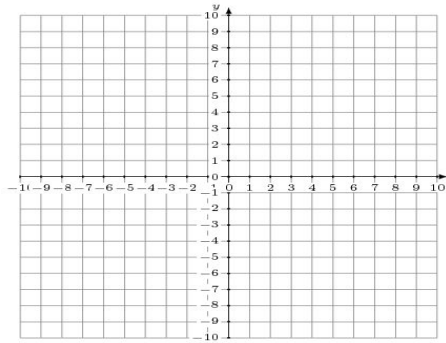
Solution: (____,____)

3. $5x + y = 2$
 $3x - y = 6$



Solution: (____,____)

4. $x + 7y = 49$
 $6x - 7y = 0$



Solution: (____,____)