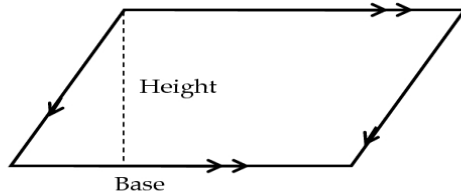
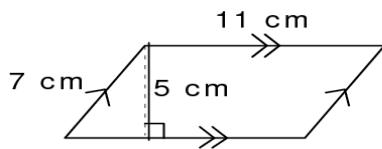


9.1 Areas of Parallelograms (and rectangles)

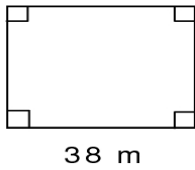
$$A_{\text{parallelogram}} = \text{base} \cdot \text{height} = bh$$



1. Area = \_\_\_\_\_



2. The figure is a rectangle with perimeter 126 m. Area = \_\_\_\_\_



3. The area of the parallelogram is 936 sq ft.  $h =$  \_\_\_\_\_

