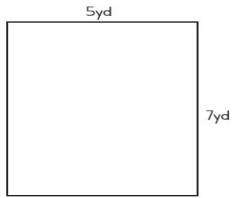


Name: \_\_\_\_\_

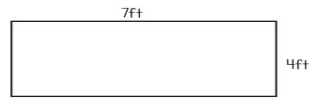
Date: \_\_\_\_\_

# Area and Perimeter of Rectangles

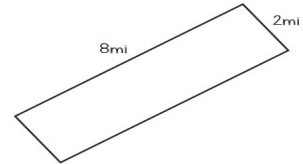
Find the area and perimeter of each rectangle.



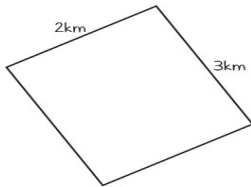
Perimeter:
Area:



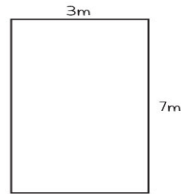
Perimeter:
Area:



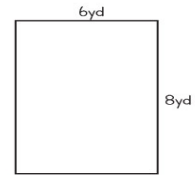
Perimeter:
Area:



Perimeter:
Area:



Perimeter:
Area:



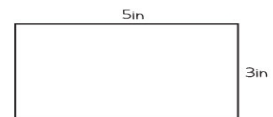
Perimeter:
Area:



Perimeter:
Area:



Perimeter:
Area:



Perimeter:
Area: