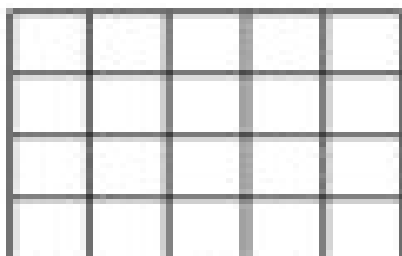



Name: _____

Finding Area


Directions: Determine the area of each shape by counting the blocks inside each shape.



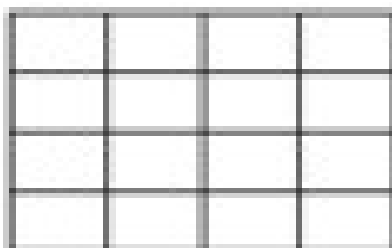
The area of this shape is _____ cubic cm.



The area of this shape is _____ cubic ft.



The area of this shape is _____ cubic in.



The area of this shape is _____ cubic m.