

Name _____


Date _____

Missing Number Math

Fill in the blank with the missing number




1	2	
---	---	--




9	10	
---	----	--




4	5	
---	---	--



5	6	
---	---	--




12	13	
----	----	--



8	9	
---	---	--



17	18	
----	----	--




3	4	
---	---	--




14	15	
----	----	--



11	12	
----	----	--



6	7	
---	---	--



18	19	
----	----	--