

Name: _____

Date: _____

Vertex and Sides

Name the vertex and sides formed by the angles.



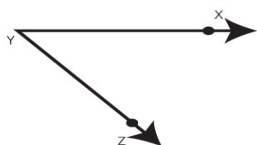
Vertex

Sides



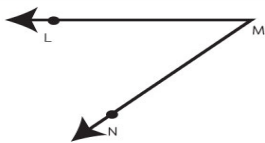
Vertex

Sides



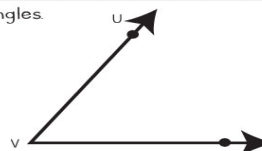
Vertex

Sides



Vertex

Sides



Vertex

Sides



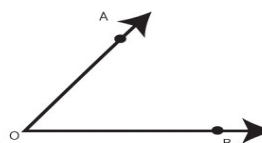
Vertex

Sides



Vertex

Sides



Vertex

Sides