




## Kindergarten Math Worksheet

Name \_\_\_\_\_

Kindergarten review.

1. Which figure has equal parts?



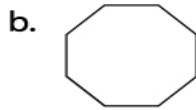
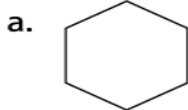
Answer: \_\_\_\_\_

2. Write the missing number in this sequence:

4, 5, 6, \_\_\_\_, 8, \_\_\_\_, 10

Answer: \_\_\_\_\_, \_\_\_\_\_

3. Which shape has more corners ?



Answer: \_\_\_\_\_

4. Add.

$$3 + 9 =$$

Answer: \_\_\_\_\_

5. Subtract.

$$7 - 4 =$$

Answer: \_\_\_\_\_