

Name

Date

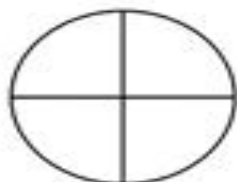


## FRACTIONS OF SHAPES 1


Shade the correct fraction of each shape.




Shade  $\frac{1}{2}$



Shade  $\frac{1}{4}$



Shade  $\frac{5}{8}$



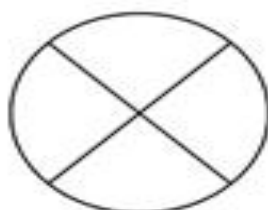
Shade  $\frac{4}{6}$



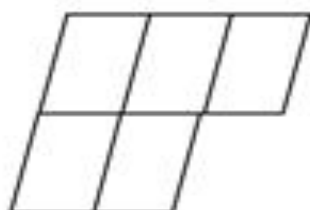
Shade  $\frac{2}{3}$



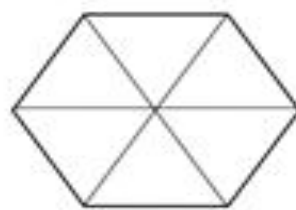
Shade  $\frac{1}{2}$



Shade  $\frac{3}{6}$



Shade  $\frac{4}{5}$



Shade  $\frac{5}{6}$



©2010 Math Salamanders Ltd.

[MATH-SALAMANDERS.COM](http://MATH-SALAMANDERS.COM)