

Name: _____

CCSS 2.NBT.3 Read and write numbers to 1000 using base-ten numerals, number names, and expanded form.

Place Value Expanded Notation

 Directions: Write the number in expanded notation.

1.




2.




3.




4.



5.



6.



7.



8.



____ I double checked my work.

Graphics/fonts copyright DJ Inkers. www.djinkers.com