

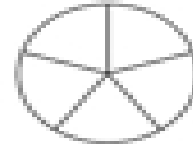


Name _____

Equal Parts

Identify equal parts.

Circle the correct examples of shapes split into equal fifths.



Circle the correct examples of shapes split into equal thirds.

