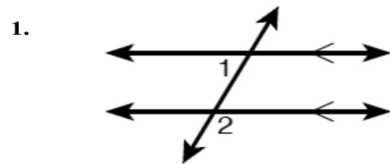




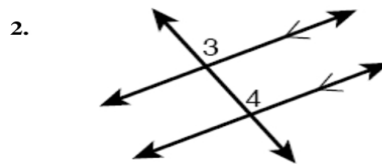
**Geometry Chapter 3 Section 2 Worksheet I**  
Como Park Senior High School

Name \_\_\_\_\_ Period \_\_\_\_\_ Due Date: \_\_\_\_\_

Determine whether each pair of angles is congruent according to the Corresponding Angles Postulate.

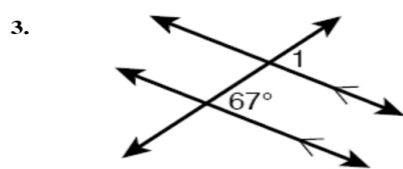


$\angle 1$  and  $\angle 2$  \_\_\_\_\_

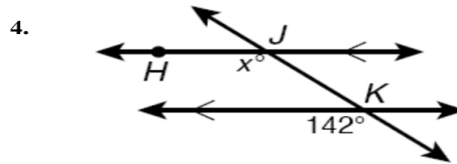


$\angle 3$  and  $\angle 4$  \_\_\_\_\_

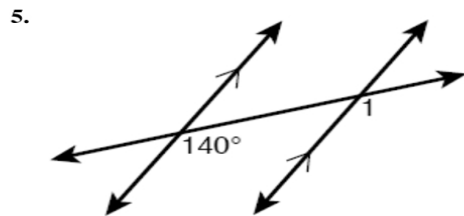
Find each angle measure.



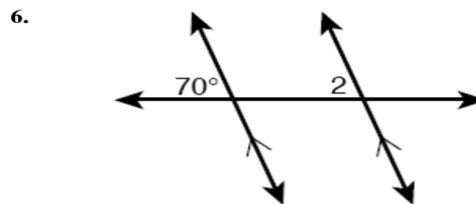
$m\angle 1 =$  \_\_\_\_\_



$m\angle HJK =$  \_\_\_\_\_



$m\angle 1 =$  \_\_\_\_\_



$m\angle 2 =$  \_\_\_\_\_