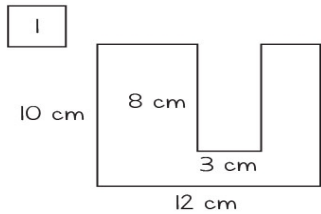


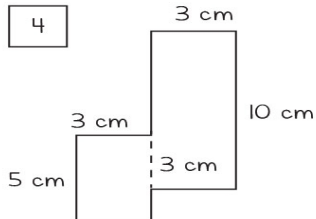
Name: \_\_\_\_\_ Date: \_\_\_\_\_

# Perimeter & Area

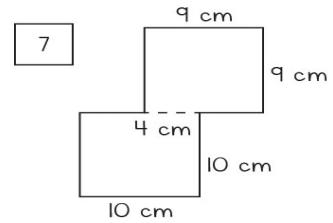
Find the perimeter and area of the following compound shapes.



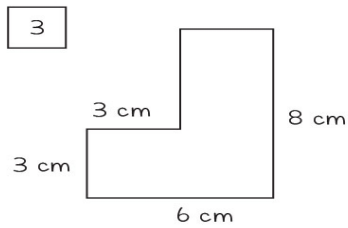
Perimeter: \_\_\_\_\_  
Area: \_\_\_\_\_



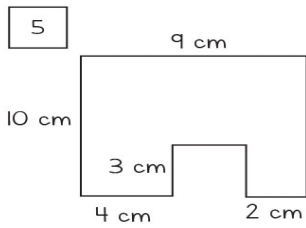
Perimeter: \_\_\_\_\_  
Area: \_\_\_\_\_



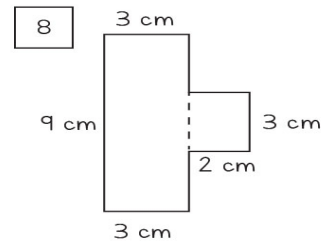
Perimeter: \_\_\_\_\_  
Area: \_\_\_\_\_



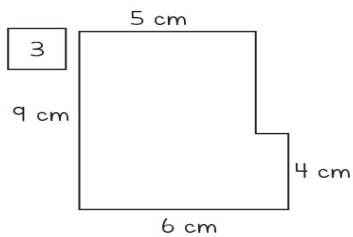
Perimeter: \_\_\_\_\_  
Area: \_\_\_\_\_



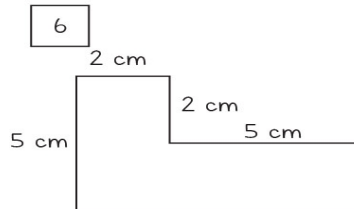
Perimeter: \_\_\_\_\_  
Area: \_\_\_\_\_



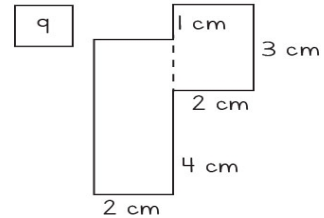
Perimeter: \_\_\_\_\_  
Area: \_\_\_\_\_



Perimeter: \_\_\_\_\_  
Area: \_\_\_\_\_



Perimeter: \_\_\_\_\_  
Area: \_\_\_\_\_



Perimeter: \_\_\_\_\_  
Area: \_\_\_\_\_