

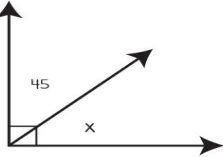
Name: \_\_\_\_\_

Date: \_\_\_\_\_

# Complementary Angles

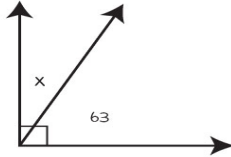
Solve for angle  $x$ .

1



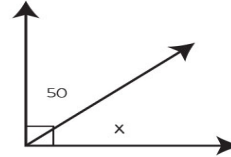
$x =$  \_\_\_\_\_

4



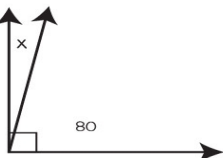
$x =$  \_\_\_\_\_

7



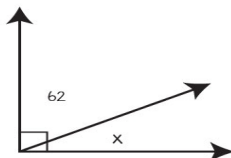
$x =$  \_\_\_\_\_

2



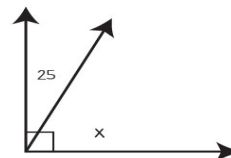
$x =$  \_\_\_\_\_

5



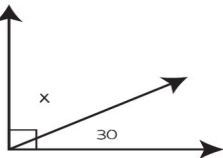
$x =$  \_\_\_\_\_

8



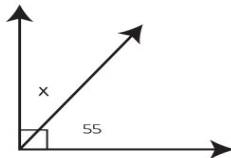
$x =$  \_\_\_\_\_

3



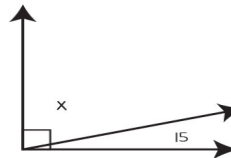
$x =$  \_\_\_\_\_

6



$x =$  \_\_\_\_\_

9



$x =$  \_\_\_\_\_