
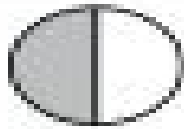


### Comparing Fractions

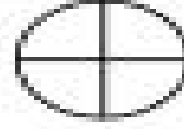
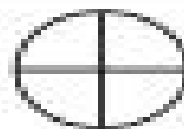
Shade and use >, <, or = to compare the fractions.



$$\frac{1}{2}$$



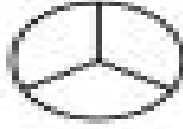
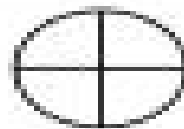
$$\frac{1}{3}$$



$$\frac{1}{4}$$



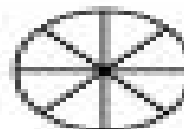
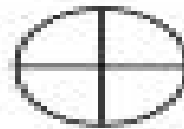
$$\frac{2}{4}$$



$$\frac{1}{4}$$



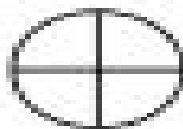

$$\frac{1}{3}$$



$$\frac{1}{4}$$



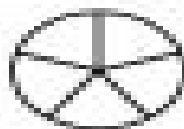
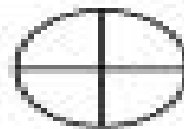
$$\frac{2}{8}$$




$$\frac{1}{2}$$



$$\frac{3}{4}$$



$$\frac{2}{4}$$



$$\frac{3}{5}$$