







## Fact Families

Directions: Solve the addition and subtraction equations in each house. Do you notice a pattern?

 $8 + 2 = \underline{\quad}$ $2 + 8 = \underline{\quad}$ $10 - 8 = \underline{\quad}$ $10 - 2 = \underline{\quad}$	 $6 + 7 = \underline{\quad}$ $7 + 6 = \underline{\quad}$ $13 - 7 = \underline{\quad}$ $13 - 6 = \underline{\quad}$
 $9 + 2 = \underline{\quad}$ $2 + 9 = \underline{\quad}$ $\underline{\quad} - 9 = \underline{\quad}$ $\underline{\quad} - 2 = \underline{\quad}$	 $14 + 5 = \underline{\quad}$ $5 + 14 = \underline{\quad}$ $\underline{\quad} - 5 = \underline{\quad}$ $\underline{\quad} - 14 = \underline{\quad}$
 $4 + 8 = \underline{\quad}$ $8 + 4 = \underline{\quad}$ $\underline{\quad} - 8 = \underline{\quad}$ $\underline{\quad} - 4 = \underline{\quad}$	 $9 + 7 = \underline{\quad}$ $7 + 9 = \underline{\quad}$ $\underline{\quad} - 9 = \underline{\quad}$ $\underline{\quad} - 7 = \underline{\quad}$