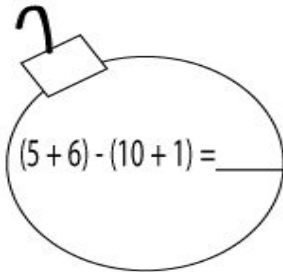
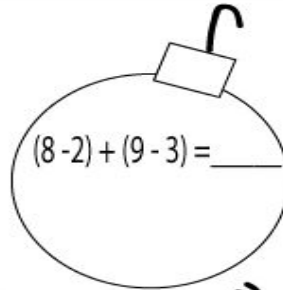
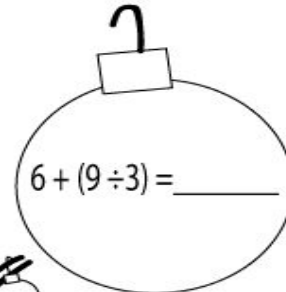


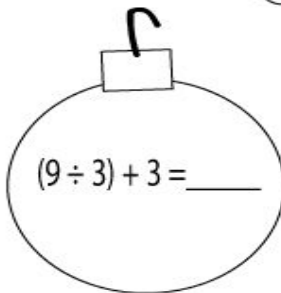
First and Then


Solve each problem.

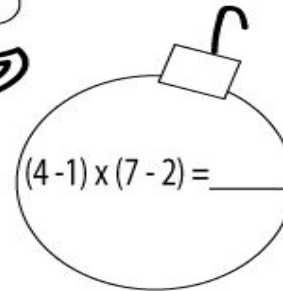

$$(5+6) - (10+1) = \underline{\quad}$$

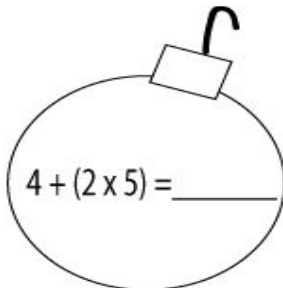

$$(8-2) + (9-3) = \underline{\quad}$$


$$6 + (9 \div 3) = \underline{\quad}$$

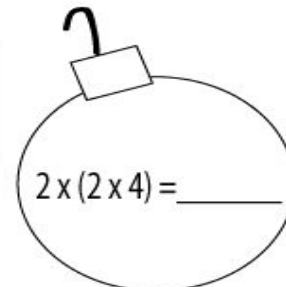

$$(9 \div 3) + 3 = \underline{\quad}$$




$$(4-1) \times (7-2) = \underline{\quad}$$


$$4 + (2 \times 5) = \underline{\quad}$$

First do work in parentheses.
Then solve the problem.


$$2 \times (2 \times 4) = \underline{\quad}$$