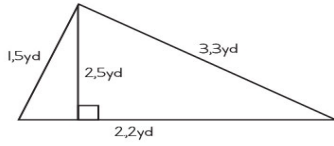


Name: \_\_\_\_\_

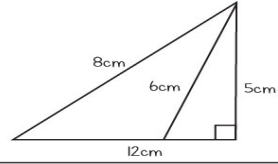
Date: \_\_\_\_\_

# Area and Perimeter of Triangles

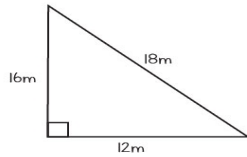
Find the area and perimeter of each given triangle.



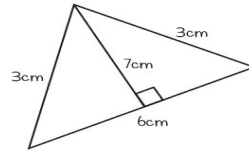
Perimeter: \_\_\_\_\_  
Area: \_\_\_\_\_



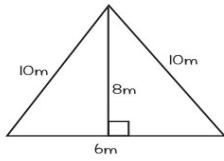
Perimeter: \_\_\_\_\_  
Area: \_\_\_\_\_



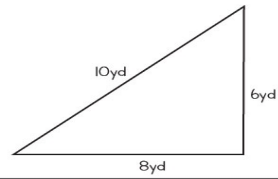
Perimeter: \_\_\_\_\_  
Area: \_\_\_\_\_



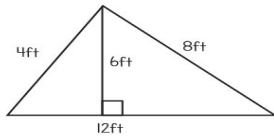
Perimeter: \_\_\_\_\_  
Area: \_\_\_\_\_



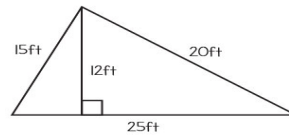
Perimeter: \_\_\_\_\_  
Area: \_\_\_\_\_



Perimeter: \_\_\_\_\_  
Area: \_\_\_\_\_



Perimeter: \_\_\_\_\_  
Area: \_\_\_\_\_



Perimeter: \_\_\_\_\_  
Area: \_\_\_\_\_