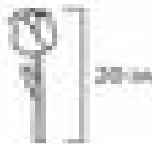


Measurement: Converting Feet & Inches

Example: How tall is the tulip?



$$20 \text{ in} = 3 \text{ ft}$$

How many feet will it take to get to the top of the tulip? (Please show your work.)

$$\begin{array}{r} 1 \text{ ft} \\ \underline{12 \text{ in}} \\ 20 \text{ in} \\ \hline 8 \text{ in} \end{array}$$

$$\text{Answer: } 1 \text{ ft } 8 \text{ in.}$$

Please convert the following heights. Be sure to show your work!

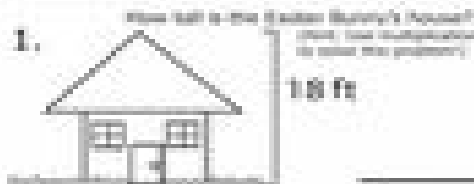
Conversion Key

$$12 \text{ inches} = 1 \text{ foot}$$

$$\text{inches} = \text{in}$$

$$\text{feet} = \text{ft}$$

1.




_____ in

2.



_____ ft _____ in

3.



_____ in

4.



_____ ft _____ in

5.



_____ in

Bonus:

If the Easter Bunny is 5 ft 8 in tall from his head to his feet, how many inches are his ears?

_____ in

