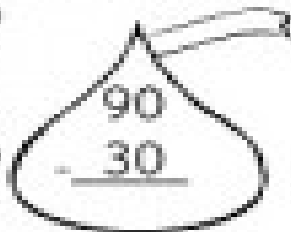



A Bit of Chocolate


Name _____

Subtraction

Directions: Solve the subtraction problems. Then color the chocolate kisses.



$$\begin{array}{r} 90 \\ - 30 \\ \hline \end{array}$$



$$\begin{array}{r} 30 \\ - 20 \\ \hline \end{array}$$


$$\begin{array}{r} 70 \\ - 30 \\ \hline \end{array}$$



$$\begin{array}{r} 40 \\ - 10 \\ \hline \end{array}$$

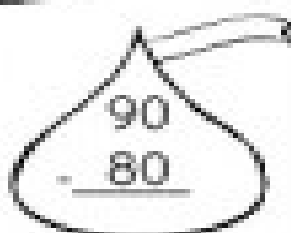

$$\begin{array}{r} 20 \\ - 10 \\ \hline \end{array}$$



$$\begin{array}{r} 80 \\ - 30 \\ \hline \end{array}$$


$$\begin{array}{r} 50 \\ - 20 \\ \hline \end{array}$$


$$\begin{array}{r} 70 \\ - 50 \\ \hline \end{array}$$


$$\begin{array}{r} 60 \\ - 10 \\ \hline \end{array}$$


$$\begin{array}{r} 90 \\ - 80 \\ \hline \end{array}$$


$$\begin{array}{r} 50 \\ - 30 \\ \hline \end{array}$$


$$\begin{array}{r} 60 \\ - 20 \\ \hline \end{array}$$