

Name: _____

Subject: Year 2 Mathematics

Date: _____


Unit: 3-D shapes

Name the following 3-D shapes:

1)




2)




3)



4)



5)



6)