

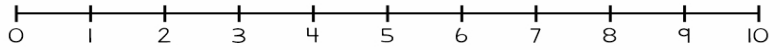
Name \_\_\_\_\_

Date \_\_\_\_\_

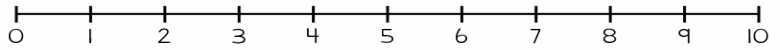
# NUMBER LINE ADDITION

Finish the number sentences. Use the number lines to help.

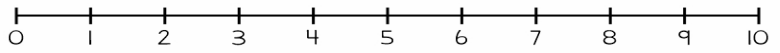
$2 + 8 = \square$



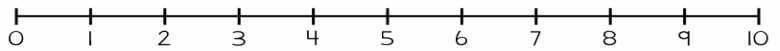
$2 + 5 = \square$



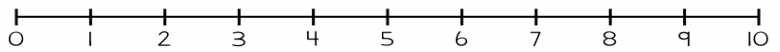
$6 + 3 = \square$



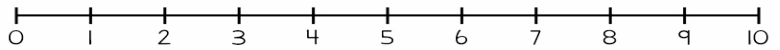
$5 + 5 = \square$



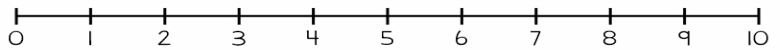
$3 + 4 = \square$



$4 + 2 = \square$



$5 + 3 = \square$



$7 + 2 = \square$

