



Name _____

Number Bonds and Addition Sentences


Color some cubes in a row red and some blue. Complete each number bond. Then write an addition sentence.




_____ + _____ = _____




_____ + _____ = _____




_____ + _____ = _____



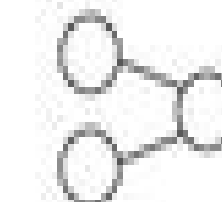
_____ + _____ = _____




_____ + _____ = _____



_____ + _____ = _____



_____ + _____ = _____



_____ + _____ = _____