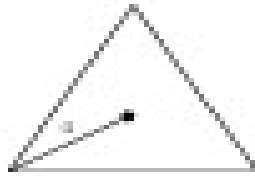
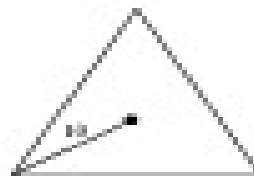


Find the area of each regular polygon. Leave answers in simplest radical form.


1)



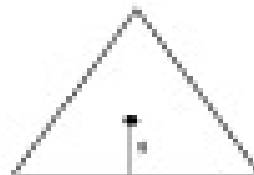
2)




3)



4)



5)



6)

