



Double Dominoes Worksheet

Draw the spots on the dominoes and add them together to find out the answer.




What is double 1?

$$\square + \square = \square$$




What is double 2?

$$\square + \square = \square$$




What is double 3?

$$\square + \square = \square$$




What is double 4?

$$\square + \square = \square$$



What is double 5?

$$\square + \square = \square$$



Can you make your own double?

What is double ?

$$\square + \square = \square$$