
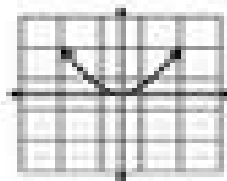



KEY Write the Domain and Range for each graph. *(Answers in red)*




- D: $[0, \infty)$
 R: $[0, \infty)$



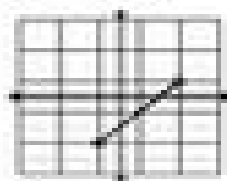
- D: $(-1, 1)$
 R: $[0, \infty)$



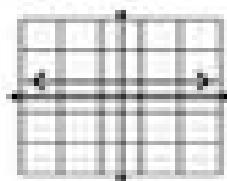
- D: $(-1, 1)$
 R: $(-\infty, 0]$



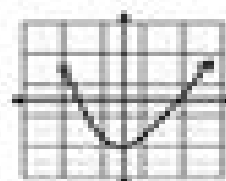
- D: $\{2\}$
 R: $[1, 3]$



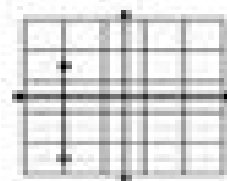
- D: $[-1, 2]$
 R: $[-1, 1]$



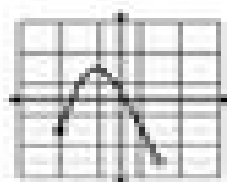
- D: $(-\infty, \infty)$
 R: $\{1\}$



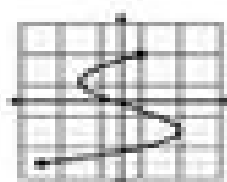
- D: $[-1, 1]$
 R: $[-1, \infty)$



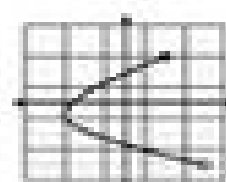
- D: $\{1\}$
 R: $\{-1, 1\}$




- D: $[0, 2]$
 R: $[0, 2]$



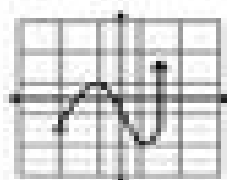
- D: $[-1, 2]$
 R: $[-1, 2]$



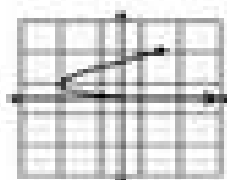
- D: $[-1, 4)$
 R: $[-1, 2)$



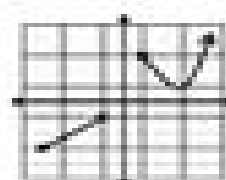
- D: $[1, 4)$
 R: $[-1, 4)$



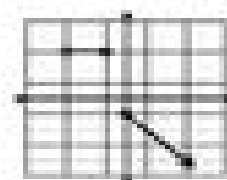
- D: $[-1, 2]$
 R: $[-1, \infty)$



- D: $(2, \infty)$
 R: $[0, 2)$



- D: $[-1, 2] \cup [2, \infty)$
 R: $[-1, 2] \cup [2, \infty)$



- D: $[-1, 2] \cup [2, \infty)$
 R: $(-\infty, 2] \cup [2, \infty)$