
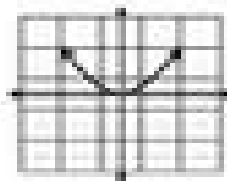



KEY Write the Domain and Range for each graph. *Answers 1-16*




- D: $[0, \infty)$
 R: $[0, \infty)$



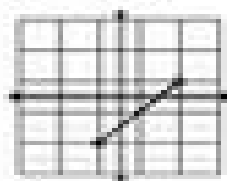
- D: $[-1, 1]$
 R: $[1, \infty)$



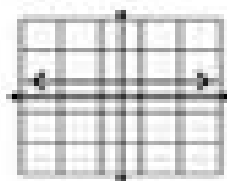
- D: $[-1, 1]$
 R: $[-1, 1]$



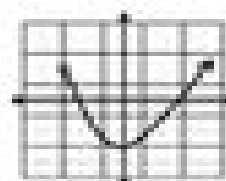
- D: $\{2\}$
 R: $[1, 3]$



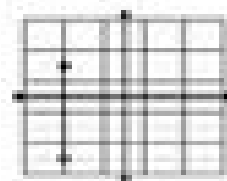
- D: $[-1, 1]$
 R: $[-1, 1]$



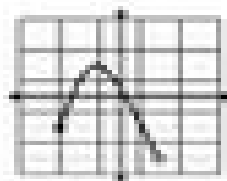
- D: $(-\infty, \infty)$
 R: $\{1\}$



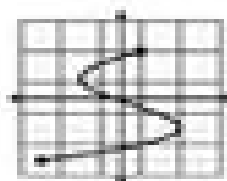
- D: $[-1, 1]$
 R: $[-1, \infty)$



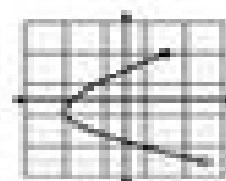
- D: $\{1\}$
 R: $\{-1, 1\}$



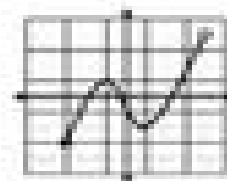
- D: $[-1, 1]$
 R: $[-1, 1]$



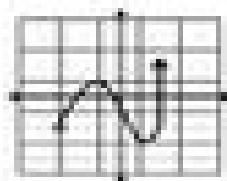
- D: $[-1, 1]$
 R: $[-1, 1]$



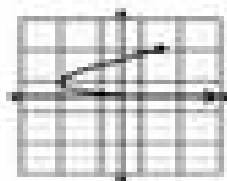
- D: $[-1, 1]$
 R: $[-1, 1]$



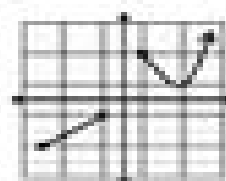
- D: $[-1, 1]$
 R: $[-1, 1]$



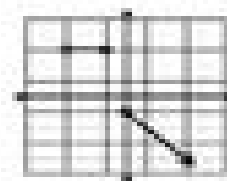
- D: $[-1, 1]$
 R: $[-1, \infty)$



- D: $[0, \infty)$
 R: $[0, 1]$



- D: $[-1, 1] \cup [1, \infty)$
 R: $[-1, 1] \cup [2, \infty)$



- D: $[-1, 1] \cup [2, \infty)$
 R: $[-1, 1] \cup [2, \infty)$