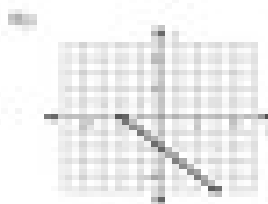




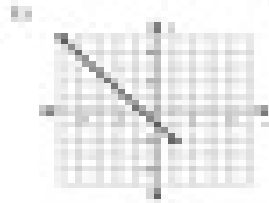


The Distance Formula

Find the distance between each pair of points. Round your answer to the nearest tenth, if necessary.



11) $\sqrt{20}$, $\sqrt{29}$, $\sqrt{29}$

21) $\sqrt{64}$, $\sqrt{40}$, $\sqrt{40}$

31) $\sqrt{5}$, $\sqrt{5}$, $\sqrt{5}$

41) $\sqrt{36}$, $\sqrt{36}$, $\sqrt{36}$

51) $\sqrt{64}$, $\sqrt{64}$, $\sqrt{64}$

61) $\sqrt{17}$, $\sqrt{17}$, $\sqrt{17}$