

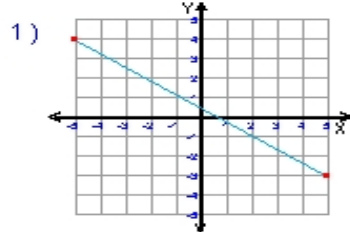
Name : _____

Score : _____

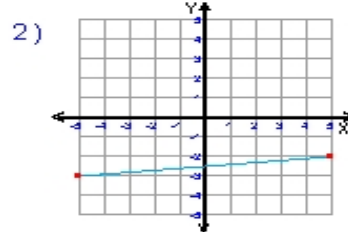
Teacher : _____

Date : _____

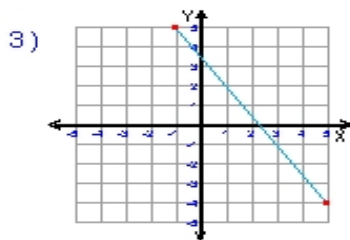
What is the slope of each line ?



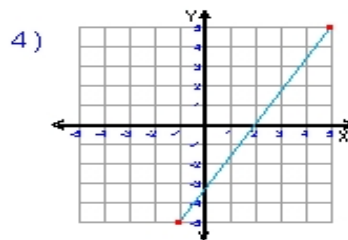
Slope = _____



Slope = _____



Slope = _____



Slope = _____

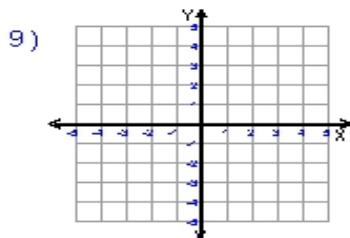
5) $y = \frac{1}{2}x - 3$ Slope = _____

6) $y = -\frac{2}{7}x + 1$ Slope = _____

7) $y = 10x + 2$ Slope = _____

8) $y = -3x$ Slope = _____

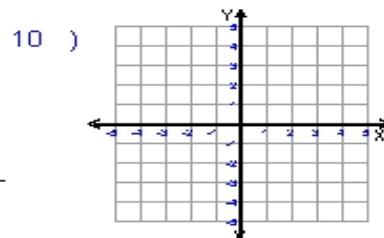
Write the slope-intercept form and plot the equation of each line given the slope and y-intercept.



Slope = $\frac{1}{7}$

y-intercept = -2

Equation : _____



Slope = $-\frac{3}{4}$

y-intercept = -3

Equation : _____