

















Name _____

Money

Comparing sets of coins

Fresh Fruit Fare

Write the value for each set of coins.

 _____¢ 	 _____¢ 
 _____¢ 	 _____¢ 
 _____¢ 	 _____¢ 
 _____¢ 	 _____¢ 

Color the fruit that costs more.

Color the fruit that costs less.

- A.  or 
- B.  or 
- C.  or 
- D.  or 
- E.  or 
- F.  or 



- G.  or 
- H.  or 
- I.  or 
- J.  or 
- K.  or 
- L.  or 

Bonus: The price of cherries equals 3 dimes, 2 nickels, and 4 pennies. Which fruits above cost less than cherries?