


Name _____ Date _____

Match the geometric solid with its name.


CC 1G2




Cone




Cylinder




Cube



Rectangular
Prism



Sphere



Triangular
Prism